

# Digital SAT

4  
Modules

98  
Questions

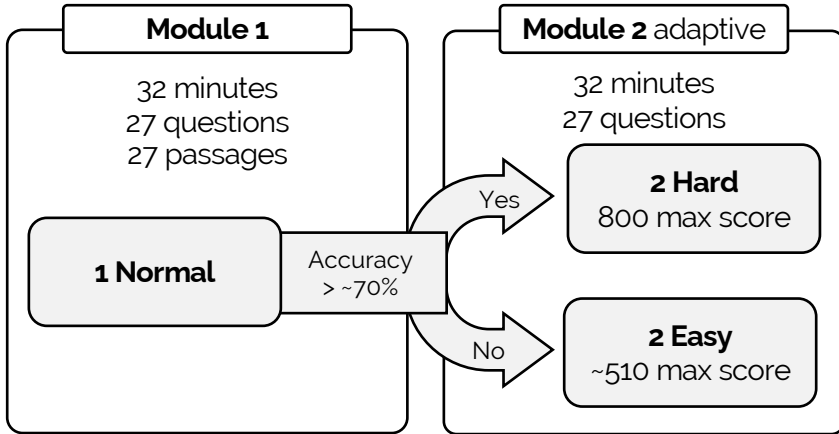
2 hrs 14 min  
Duration

1600\*  
Max Score

## Reading & Writing



64 minutes & 54 questions  
71 seconds per question



- Reading Comprehension & Writing Skills
- 54 Short Passages (25-150 words), 1 Question Each
- Multiple Choice

### screenshot

The following text is from Frances Hodgson Burnett's 1911 novel *The Secret Garden*. Mary, a young girl, is outside trying her new jump rope.

The sun was shining and a little wind was blowing—not a **rough** wind, but one which came in delightful little gusts and brought a fresh scent of newly turned earth with it. She skipped round the fountain garden, and up one walk and down another.

1 Mark for Review

As used in the text, what does the word "rough" most nearly mean?

(A) Harsh

(B) Scratchy

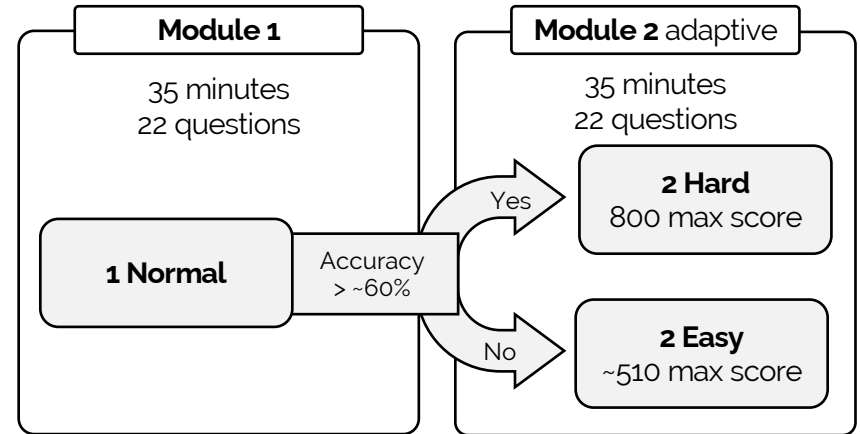
(C) Basic

(D) Vague

## Math



70 minutes & 44 questions  
95 seconds per question



- Math Skills through Algebra II
- Calculator Allowed
- 2/3 Multiple Choice & 1/3 Free Response

### screenshot

2 Mark for Review

If  $x = 40$ , what is the value of  $x + 6$ ?

(A) 34

(B) 40

(C) 46

(D) 64

# Digital PSAT

4  
Modules

98  
Questions

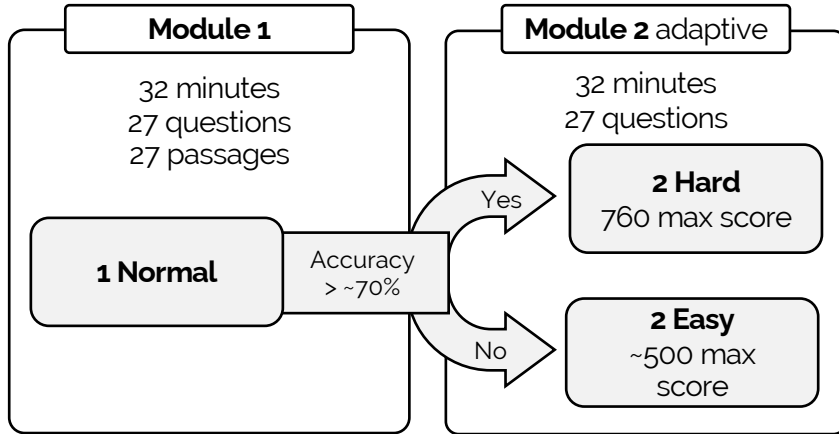
2 hrs 14 min  
Duration

1520\*  
Max Score

## Reading & Writing



64 minutes & 54 questions  
71 seconds per question



- Reading Comprehension & Writing Skills
- 54 Short Passages (25-150 words), 1 Question Each
- Multiple Choice

### screenshot

The following text is from Frances Hodgson Burnett's 1911 novel *The Secret Garden*. Mary, a young girl, is outside trying her new jump rope.

The sun was shining and a little wind was blowing—not a **rough** wind, but one which came in delightful little gusts and brought a fresh scent of newly turned earth with it. She skipped round the fountain garden, and up one walk and down another.

1 Mark for Review

As used in the text, what does the word "rough" most nearly mean?

(A) Harsh

(B) Scratchy

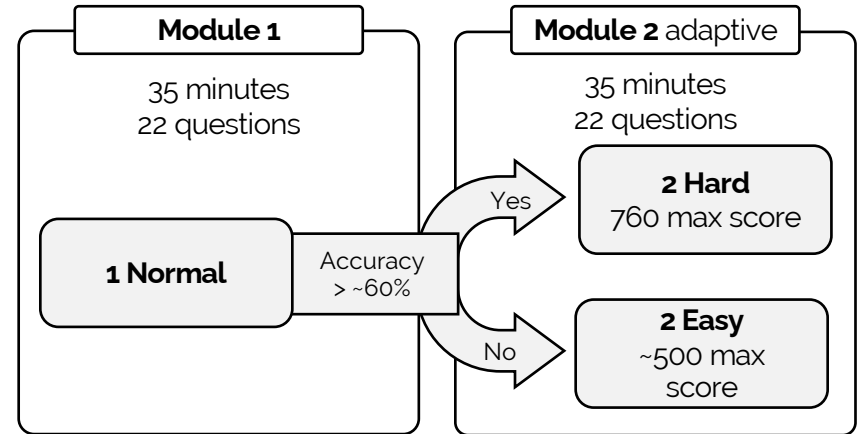
(C) Basic

(D) Vague

## Math



70 minutes & 44 questions  
95 seconds per question



- Math Skills through Algebra II
- Calculator Allowed
- 2/3 Multiple Choice & 1/3 Free Response

### screenshot

2 Mark for Review

If  $x = 40$ , what is the value of  $x + 6$ ?

(A) 34

(B) 40

(C) 46

(D) 64